

NAME: \_\_\_\_\_

# Count on Pablo Coloring Worksheet

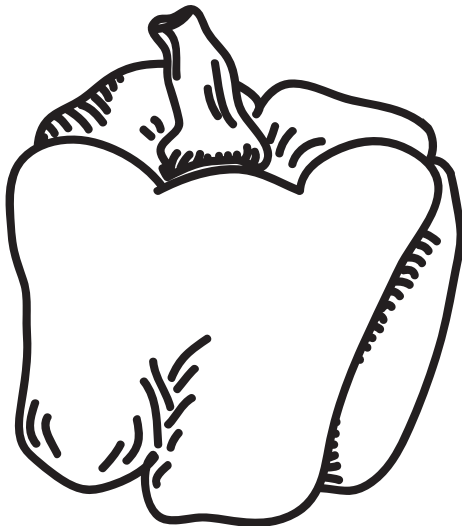
In the book *Count on Pablo*, Abuela and Pablo invest a portion of their goods to make salsa. Pablo's recipe calls for 10 tomatoes, 5 peppers, 2 onions, a lime and a bunch of cilantro.



**1 LIME**



**2 ONIONS**



**5 PEPPERS**




**10 TOMATOES**

**AND A BUNCH OF CILANTRO!**

NAME: \_\_\_\_\_

# Pablo's Counting Worksheet

In the book *Count on Pablo*, Abuela and Pablo invest a portion of their vegetables to make salsa. The goods they use to make salsa were an expense to their business. Can you help Pablo by figuring out how many goods they have to sell after subtracting those that were used to make salsa?




**\$.50  
EACH**

Tomatoes Brought to Market: 200

Tomatoes Used to Make Salsa: - 10

**HOW MANY LEFT TO SELL?**




**\$1.00  
EACH**

Peppers Brought to Market: 100

Peppers Used to Make Salsa: - 5

**HOW MANY LEFT TO SELL?**




**\$.75  
EACH**

Onions Brought to Market: 40

Onions Used to Make Salsa: - 2

**HOW MANY LEFT TO SELL?**




**\$.50  
EACH**

Limes Brought to Market: 20

Limes Used to Make Salsa: - 1

**HOW MANY LEFT TO SELL?**



**\$1.00  
BUNCH**

Cilantro Brought to Market: 20

Cilantro Used to Make Salsa: - 1

**HOW MANY LEFT TO SELL?**

NAME: \_\_\_\_\_

# Pablo's Profit Worksheet

In order to figure out the expenses and profits of making salsa, Pablo needs to crunch the numbers below. Can you help him figure out how much money their decisions will result in?

**(1) Each pepper costs \$1.00. How much are 95 peppers worth?**

- A) \$9.50                      B) \$1.00                      C) \$950.00                      D) \$95.00

**(2) If each tomato is worth 50 cents each, the 10 tomatoes Pablo and Abuela used to make salsa was a business expense of:**

- A) \$15.00                      B) \$5.00                      C) \$50.00                      D) \$500.00

**(3) If 40 onions sell for \$30.00, how much is each individual onion worth?**

- A) \$0.75                      B) \$1.75                      C) \$2.00                      D) \$1.25

**(4) If 5 limes are priced at 2.50, how much could you purchase all twenty limes for?**

- A) \$5.00                      B) \$20.00                      C) \$10.00                      D) \$25.00

**(5) If Abuela's cilantro is worth \$1.00 a bundle, the remaining 19 bundles are worth:**

- A) \$1.00                      B) \$18.00                      C) \$19.00                      D) \$1.90

## BONUS:

*Using the prices above, how much money are the 190 tomatoes, 95 peppers, 38 onions, 19 limes, and 19 bundles of cilantro worth?*

- A) \$200.00                      B) \$470.00                      C) \$984.00                      D) \$247.00

Answers: 1) D, \$95.00; 2) B, \$5.00; 3) A, \$0.75; 4) C, \$10.00; 5) C, \$19.00; BONUS: D, \$247.00